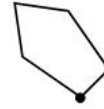
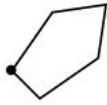


Rotation Drill

Identify the number of degrees of rotation shown in each representation.



Answers: 45° , 90° , 135° , 180° , 225° , 270° , 315°



_____ Clockwise

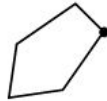
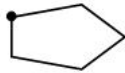
_____ Clockwise

_____ Clockwise

_____ Counterclockwise

_____ Counterclockwise

_____ Counterclockwise



_____ Clockwise

_____ Clockwise

_____ Clockwise

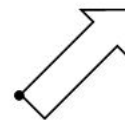
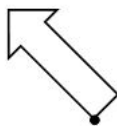
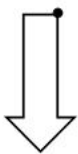
_____ Counterclockwise

_____ Counterclockwise

_____ Counterclockwise



Answers: 45° , 90° , 135° , 180° , 225° , 270° , 315°



_____ Clockwise

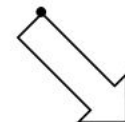

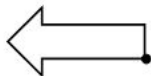
_____ Clockwise

_____ Clockwise

_____ Counterclockwise

_____ Counterclockwise

_____ Counterclockwise



_____ Clockwise

_____ Clockwise

_____ Clockwise

_____ Counterclockwise

_____ Counterclockwise

_____ Counterclockwise